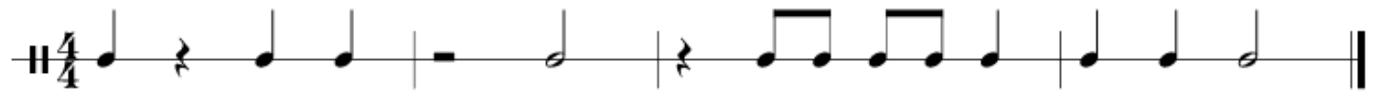
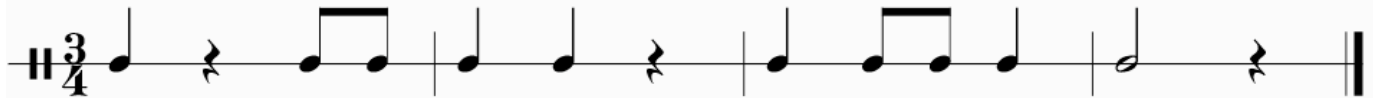



**What will be on your Final Exam?**  
**Study Guide**

**Written Final**

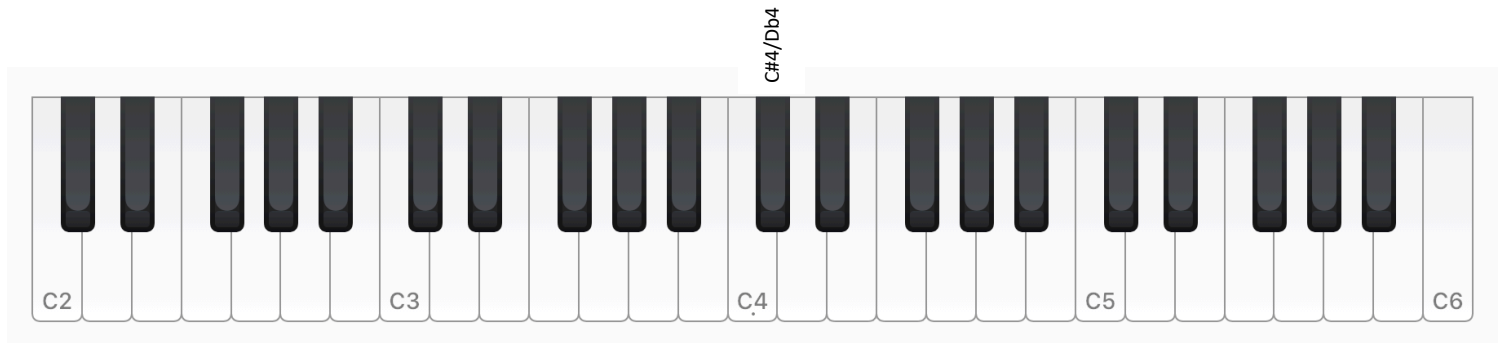
1) Rhythms: Write in the counts and circles to the rhythm examples below.



2A) Note Identification: Identify all of the notes on the staves below (treble and bass clef)



2B) Note Identification: Identify all of the notes on the black keyboard below. Make sure to use the correct Octave. Write the names to the black keys above each one, vertically.



3) Scale Building: Please build the following major scales

C Major Scale




F Major Scale



G Major Scale



4) Key Signatures: Identify the following key signatures (all 13 key signatures are below)



5) Chords:

- Start by writing a treble clef at the beginning of the staff
- Next write out a C Major Scale. Leave plenty of room between each note.
- Write in the triad for each scale degree
- Write in the correct roman numeral for each triad.



Write in the correct triads above each roman numeral. All are in C Major.



I

V

vi

IV